

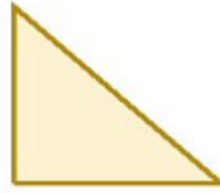
Challenge 1

This is half of Lee's strawberries.



How many strawberries does Lee have?

This is half of Lee's shape.



What could the whole shape look like?

Challenge 2


Tim buys a lolly and a chew.

- The lolly costs 12p more than the chew.
- The total cost of the two items is 82p.
- How much does the lolly cost?



Challenge 3

- Stickers come in packs of 5.
- Max buys 12 packs.
- He gives his three friends some stickers.
- They each receive the same number.
- He has 27 stickers left.
- How many stickers did Max give each of his friends?



Challenge 4

Here are 3 containers.


- The jug can hold 1500 ml.
- The bucket can hold 2 litres.
- The barrel can hold 15 litres.



Anisa wants to fill the barrel with water. **Find 2 ways** that Anisa can fill the barrel using the jug and bucket.

MATH

Crossword Puzzle



Fill in the blanks of each crossword puzzle to make the multiplication equations true.

2	x		=	6
---	---	--	---	---

	x	5	=	30
--	---	---	---	----

				x
--	--	--	--	---

x				
---	--	--	--	--

	x	1	=	
--	---	---	---	--

8	x	4	=	
---	---	---	---	--

			=	
--	--	--	---	--

=				
---	--	--	--	--

	x	24	=	
--	---	----	---	--

	x	7	=	
--	---	---	---	--

3	x	12	=	
---	---	----	---	--

x				x
---	--	--	--	---

x				
---	--	--	--	--

11		5	x		=	
----	--	---	---	--	---	--

--	--	--	--	--	--	--

=				=		
---	--	--	--	---	--	--

=						
---	--	--	--	--	--	--

22				42		
----	--	--	--	----	--	--

	x		=	90
--	---	--	---	----